

Name \_\_\_\_\_

Score \_\_\_\_\_

Math 7

Spiral Review 3



1. Write answer in simplest form:

Show all work

$$\frac{4}{6} - \frac{2}{12} =$$

Answer \_\_\_\_\_

2. Find the difference of 12.8 and 6.24

Show all work

Answer \_\_\_\_\_

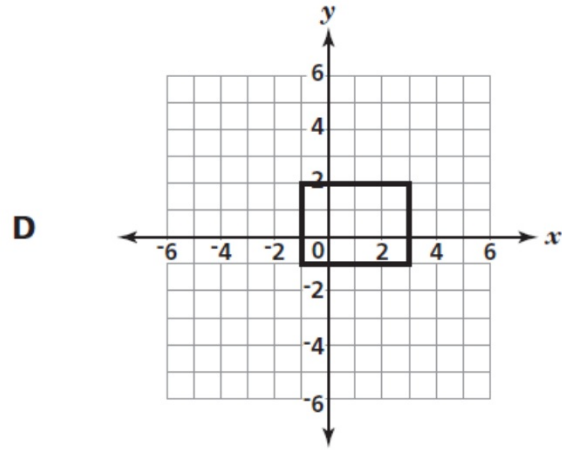
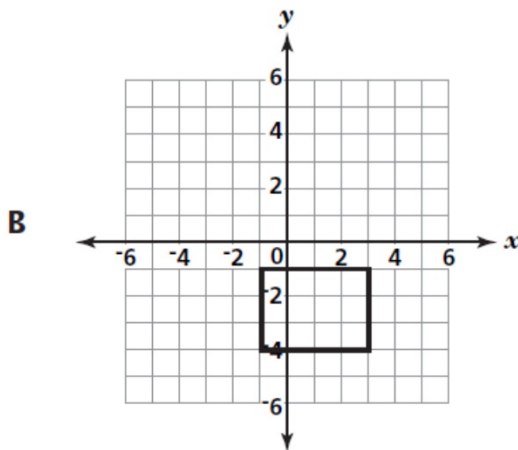
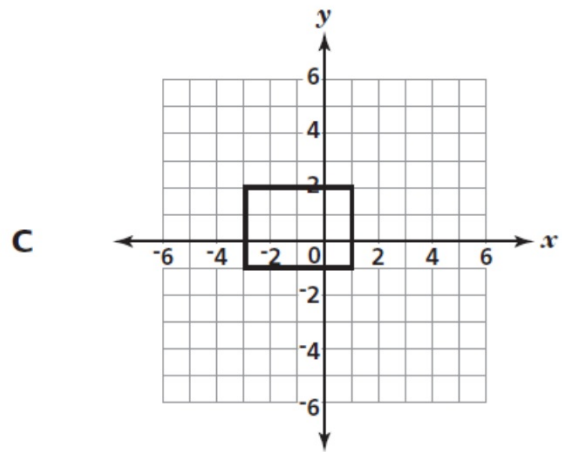
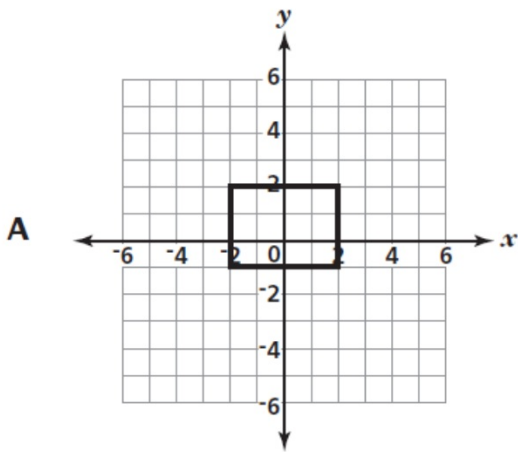
3. Greg read  $\frac{3}{5}$  of the assigned book, while Jeremy read  $\frac{1}{10}$  of the assigned book. How much more of the book did Greg read?

Show all work

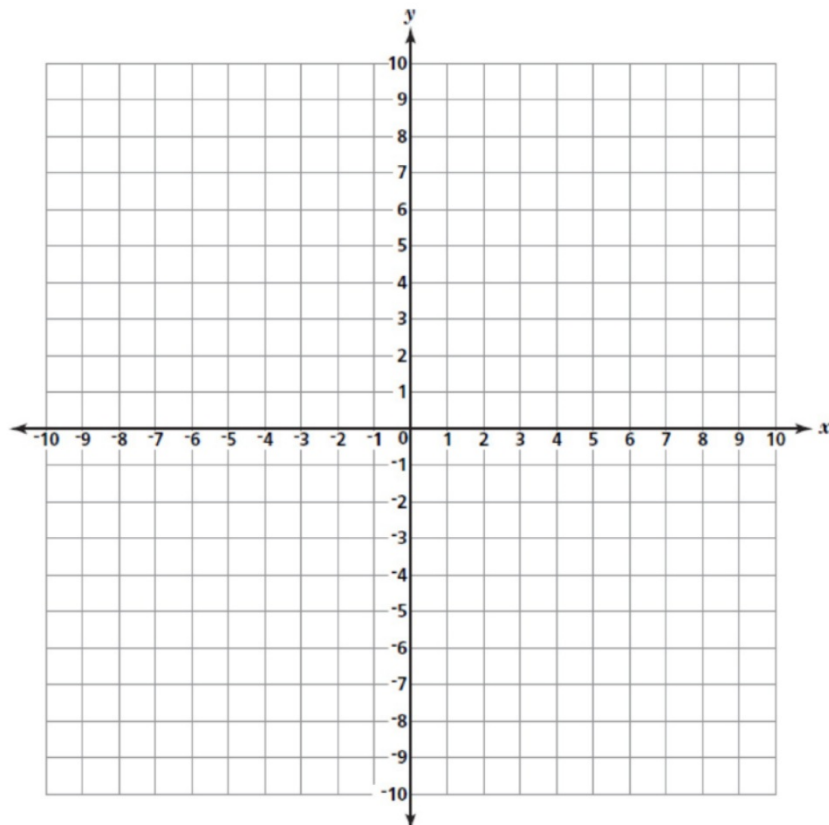


Answer \_\_\_\_\_

4. Which figure below represents a rectangle with vertices  $(3, 2)$ ,  $(-1, 2)$ ,  $(-1, -1)$ , and  $(3, -1)$ ?



5. On the grid below, Ronda lives at the ordered pair  $(-4, 7)$  and Tia lives at  $(-4, -3)$ . If each unit represents 1 mile, how many miles do the girls live from each other?



Make sure you:  
 Plot each point  
 and answer the question

Answer \_\_\_\_\_