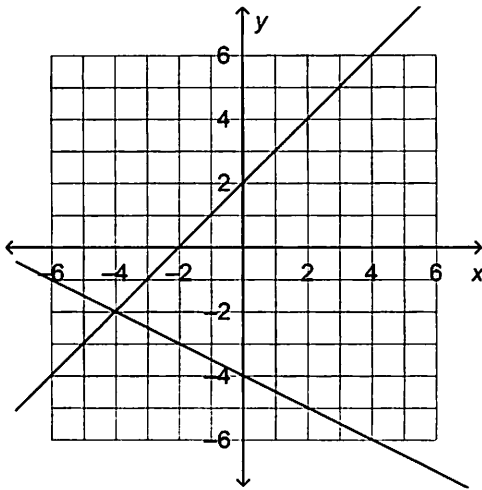


___ 11. Does the ordered pair $(-5, 3)$ satisfy the system of equations? Explain.

$$\begin{cases} y = -2x - 1 \\ y = -\frac{3}{5}x \end{cases}$$

- a. Yes, because the ordered pair $(-5, 3)$ satisfies both equations of the system.
- b. No, because the ordered pair $(-5, 3)$ satisfies only the equation $y = -2x - 1$.
- c. No, because the ordered pair $(-5, 3)$ satisfies only the equation $y = -\frac{3}{5}x$.
- d. No, because the ordered pair $(-5, 3)$ satisfies neither equation of the system.

___ 12. Which ordered pair is the solution of the system of linear equations?



- a. $(-4, -2)$
- b. $(-4, 2)$
- c. $(-2, -4)$
- d. $(2, 4)$

___ 13. What solution(s) does the system of equations have?

$$\begin{cases} -2x + 5y = 10 \\ -4x + 10y = 20 \end{cases}$$

- a. There are infinitely many solutions.
- b. The only solution is $(5, 4)$.
- c. The only solution is $(10, 6)$.
- d. There are no solutions.

_____ 14. To solve the system of equations $\begin{cases} 4x + y = -12 \\ 5x + 2y = 25 \end{cases}$, what expression should be substituted for y in the equation $5x + 2y = 25$?

- a. $-\frac{y}{4} - 3$
- b. $-4x - 12$
- c. $-\frac{5}{2}x + \frac{25}{2}$
- d. $-\frac{2}{5}y + 5$

_____ 15. Trudy and Xander are saving money from their newspaper route earnings. Their savings s , in dollars, is related to the time t , in weeks, after they start working. Trudy's savings are given by the equation $s = 40t + 50$, and Xander's savings are given by the equation $s = 35t + 100$. What is the meaning of the solution of the system of equations?

- a. Trudy and Xander both have \$450 saved after 10 weeks of working on their newspaper routes.
- b. Trudy and Xander both have \$10 saved after 450 weeks of working on their newspaper routes.
- c. Trudy and Xander both have \$170 saved after 2 weeks of working on their newspaper routes.
- d. Trudy and Xander both have \$130 saved after 2 weeks of working on their newspaper routes.

_____ 16. There are 25 coins inside a container. Some of the coins are nickels, and the rest are quarters. The value of the coins is \$4.05. Let n represent the number of nickels, and let q represent the number of quarters. Which system of equations represents this situation?

- a. $\begin{cases} n - q = 25 \\ 0.05n + 0.25q = 4.05 \end{cases}$
- b. $\begin{cases} n + q = 4.05 \\ 0.05n + 0.25q = 25 \end{cases}$
- c. $\begin{cases} n + q = 25 \\ 0.05n + 0.25q = 4.05 \end{cases}$
- d. $\begin{cases} n + q = 25 \\ 5n + 25q = 4.05 \end{cases}$

Name: _____

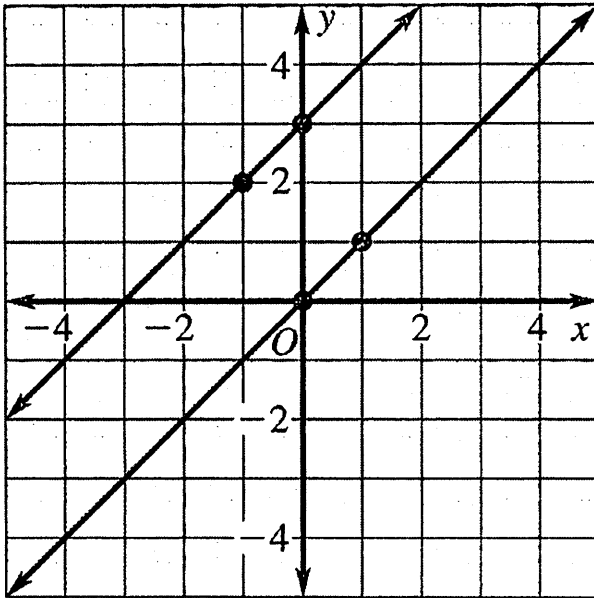
ID: A

___ 17. The line that passes through the points $(-5, -6)$ and $(-3, 2)$ and the line $y = x - 4$ intersect at what point?

- a. $(-5, -6)$
- b. $(2, -2)$
- c. $(-3, 2)$
- d. $(-6, -10)$

Short Answer: Write your answer

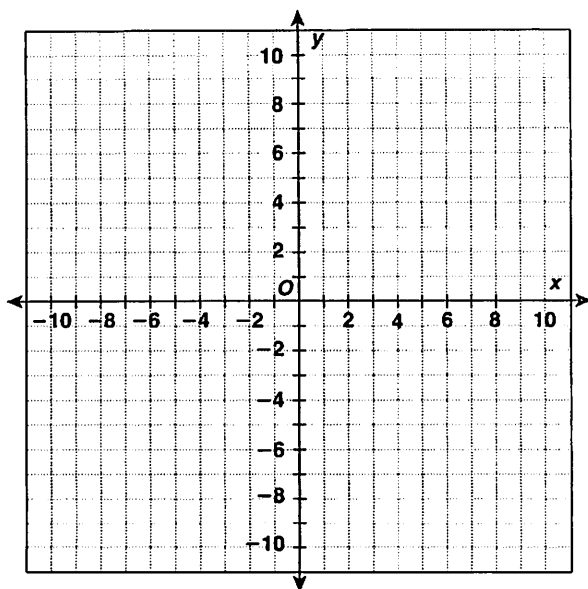
1. The graph of a system of linear equations is shown. Write the solution of the system.



Name: _____

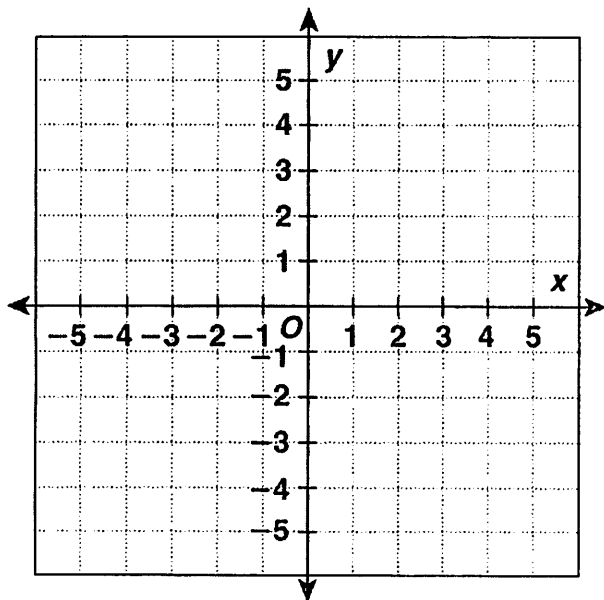
ID: A

2. Solve $\begin{cases} y = x - 3 \\ y = -x + 5 \end{cases}$ by graphing.



Solution _____

3. Solve $\begin{cases} 4x + y = -1 \\ y - 4 = x \end{cases}$ by graphing.

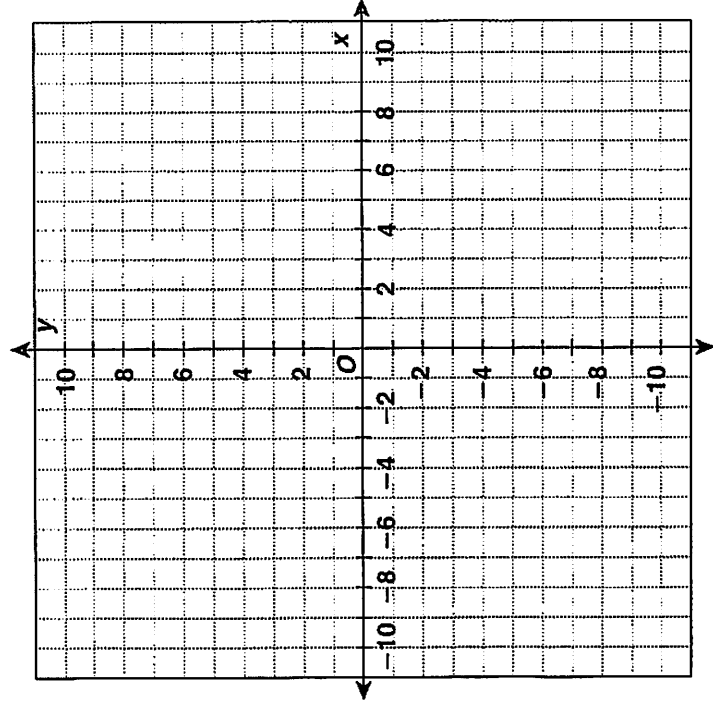


Solution _____

Name: _____

ID: A

4. Solve $\begin{cases} y - 2 = \frac{1}{3}x \\ 3y = -2x - 3 \end{cases}$ by graphing.



Solution _____

5. Solve the system of equations.

$$\begin{cases} y = 2x + 5 \\ y = 3x + 4 \end{cases}$$

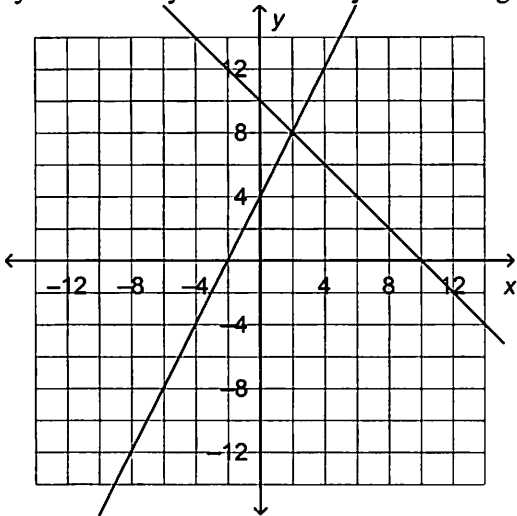
Solution: _____

6. Solve the system using any algebraic method.

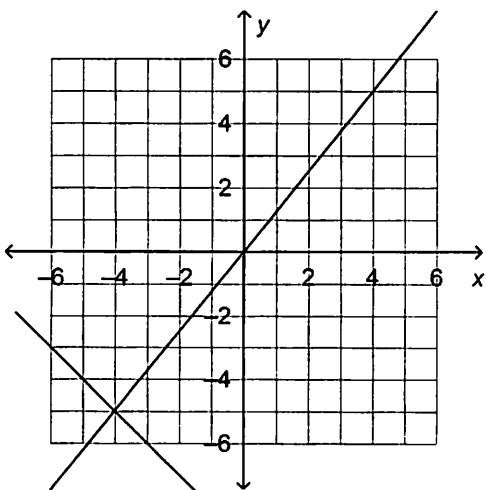
$$\begin{aligned} x - y &= -5 \\ x + y &= 11 \end{aligned}$$

Solution _____

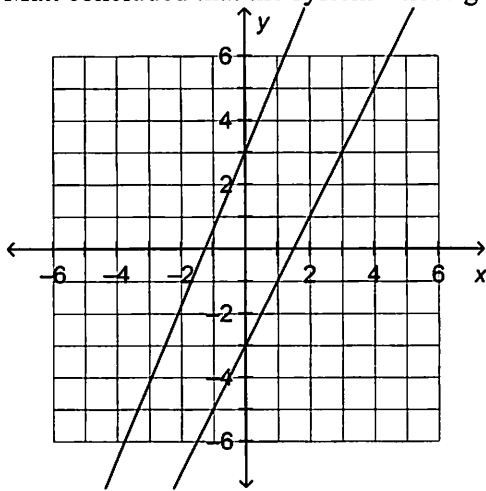
7. The graph of the system of linear equations $x + y = 10$ and $-2x + y = 4$ is shown. What is the solution of the system? Verify the solution by substituting it into each equation.



8. Is the ordered pair $(-5, -4)$ a solution of the system of linear equations whose graph is shown? Explain your reasoning.



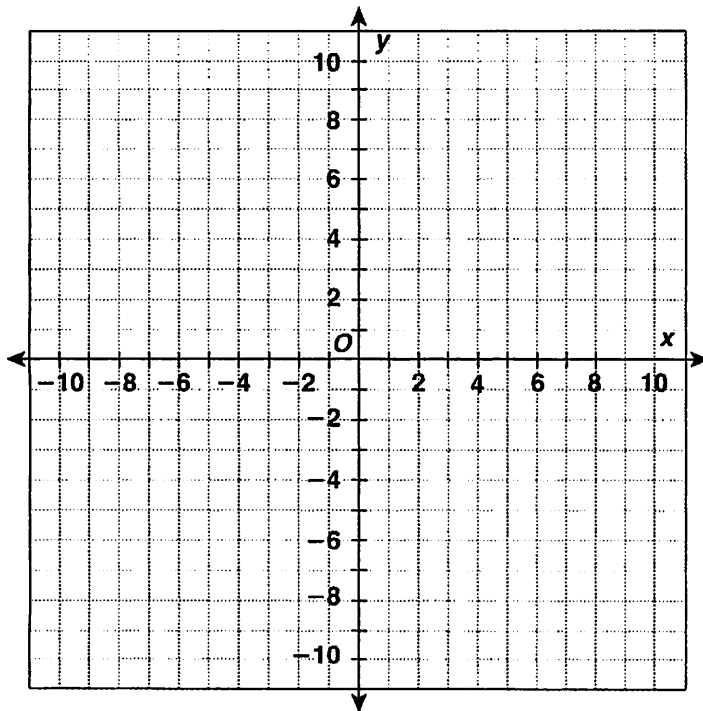
9. Matt concluded that the system whose graph is shown has no solution. Is he correct? Explain your reasoning.



10. Solve the system of equations by examining the equations. Explain your reasoning.

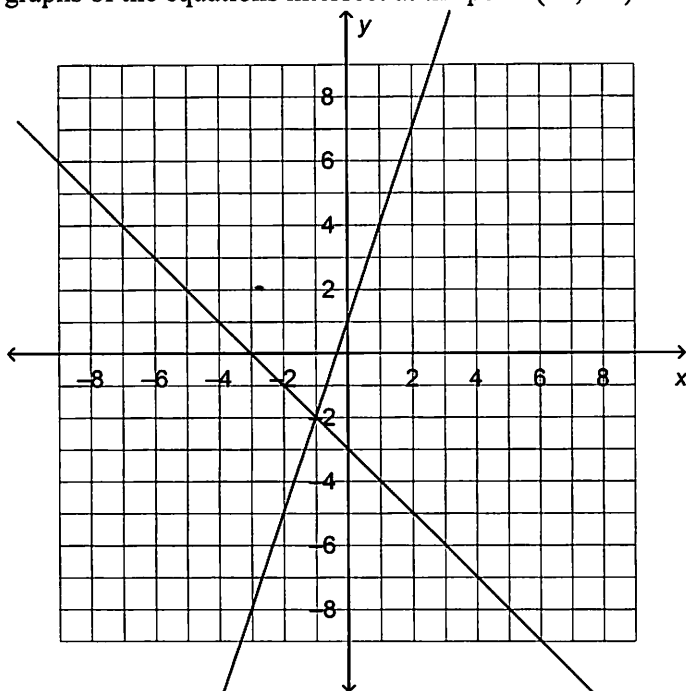
$$\begin{cases} -2x + 4y = 5 \\ -2x + 4y = 6 \end{cases}$$

11. A line has a slope of $-\frac{1}{3}$ and a y -intercept of 8. Another line passes through the points $(-3, -5)$ and $(1, 3)$. Find the equations of the lines, and then determine the point where the lines intersect.

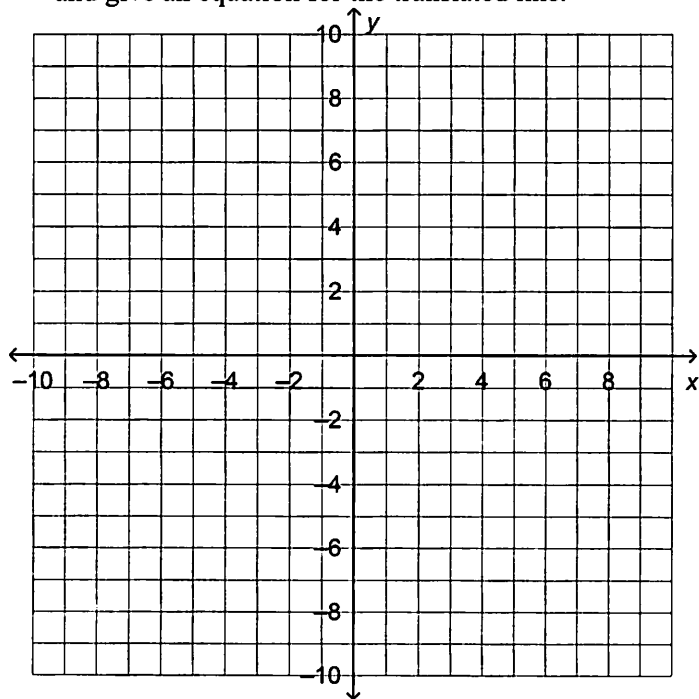


Problem

1. Chandler says that the solution of the system of equations $y = -x - 3$ and $y = 3x + 1$ is $(-2, -1)$ because the graphs of the equations intersect at the point $(-2, -1)$.



- Identify and correct Chandler's error.
- Explain how one of the lines could be translated to make Chandler's solution of the system of equations correct. Draw the line that does not change along with the translated line on the coordinate plane below, and give an equation for the translated line.



Systems of Linear Equations Packet**Multiple Choice**

Identify the choice that best completes the statement or answers the question.

- _____ 1. Solve the system of equations.

$$4x + 3y = 16$$

$$x = -3y + 13$$

a. (1,4)

b. (-1,4)

- _____ 2. Solve the system of equations.

$$x + y = -3$$

$$x - y = -5$$

a. (4,2)

c. (-4,1)

b. (-5,2)

d. (-5,4)

- _____ 3. Franco is solving a system of linear equations algebraically. He find that there are an infinite number of solutions. Which is a possible step in his solution?

a. $5 = 5 + 1$

b. $-5 = 5$

c. $11 = 5$

d. $5 = 5$

- _____ 4. Giovanni solves a system of equations algebraically. He concludes that the lines are parallel. Which could be the final line of his solution?

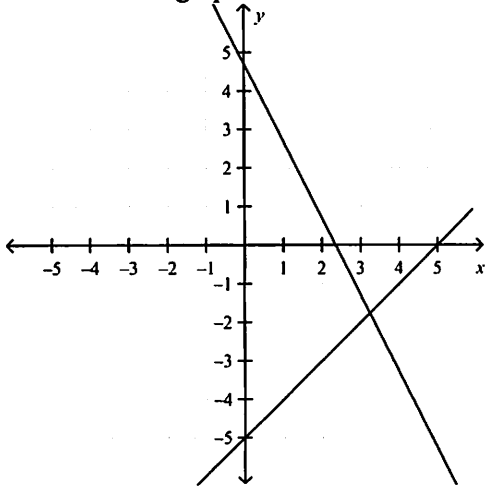
a. $-5 = -5$

b. $-5 = -5 + 1$

c. $11 = 11$

d. $5 = 5$

5. Carla uses the graph to find a solution.



Explain why the solution is an estimate.

- The lines do not intersect.
- Neither graph goes through the origin, so there is no solution.
- The coordinates of the solution are not whole numbers.
- The accuracy is limited because the x -axis and y -axis both extend only from -5 to 5 .

6. Chloe, Tarina, and Lizette solved the system of equations shown.

$$\frac{2}{3}x + 3y = 26$$

$$2x + \frac{1}{2}y = 27$$

Chloe claims the solution is $(3, 8)$. Tarina claims the solution is $(-6, 10)$.
Lizette claims the solution is $(12, 6)$. Which statement is true?

- Chloe's solution is correct.
- Tarina's solution is correct.
- Lizette's solution is correct.
- None of the solutions are correct.

7. Which system of linear equations has no solution?

- $x + y = 9$

$$x - y = 3$$

- $-5x = 9 - y$

$$-5x + y = 3$$

- $2x + y = 4$

$$x - 3y = 9$$

- $4x + 3y = 5$

$$3x - 2y = 14$$